


Name _____

column


Fold here



Point to the circled group of stars.
Say: The **column** of stars is circled.




row



Point to the circled group of stars.
Say: The **row** of stars is circled.

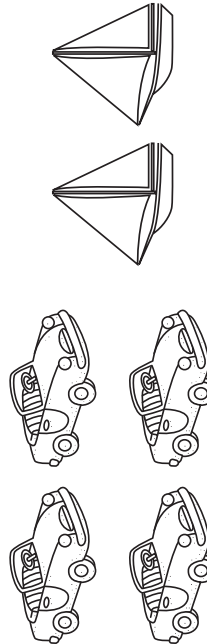
fewer (than)

Fold here



Point to the cats.
Say: There are **fewer** cats than dogs.

more (than)

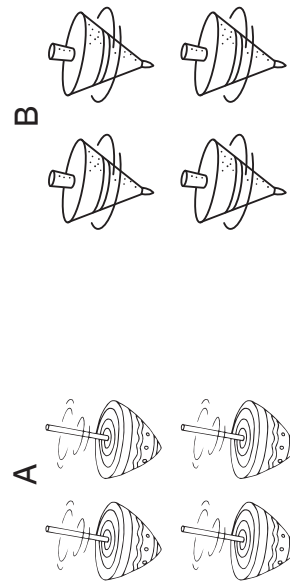


Point to the cars.
Say: There are **more** cars than sailboats.



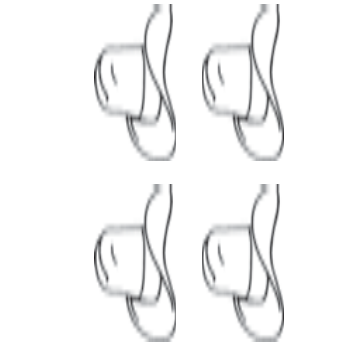
same
number of

Fold here



Point to the picture labeled A.

Say: The number of tops in picture A is the **same as** the number in picture B.




Point to the group of hats.

Say: There is the **same number of** hats as coats.



1 more (than)

Fold here



Point to the dashed apple.
Say: 5 is **1 more** than 4.

2 more (than)




Point to the dashed spoons.
Say: 4 is **2 more** than 2.



Name _____

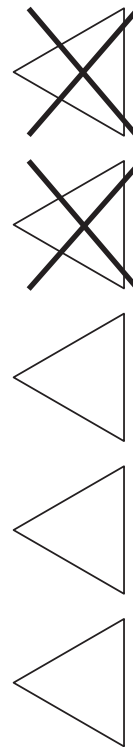
1 fewer (than)

Fold here



Point to the flowers.
Say: **1 fewer** than 3 is 2.

2 fewer (than)




Point to the shapes.
Say: **2 fewer** than 5 is 3.



Name _____

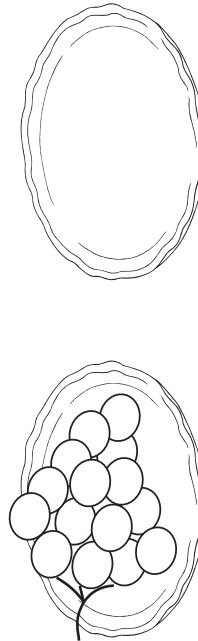
zero



Point to the 0.
Say: The number **zero** means there are no objects in the group.

Fold here

none

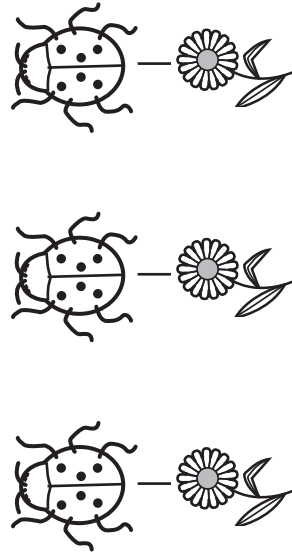


Point to the plates.
Say: There are grapes on the plate on the left. There are **none** on the plate on the right.



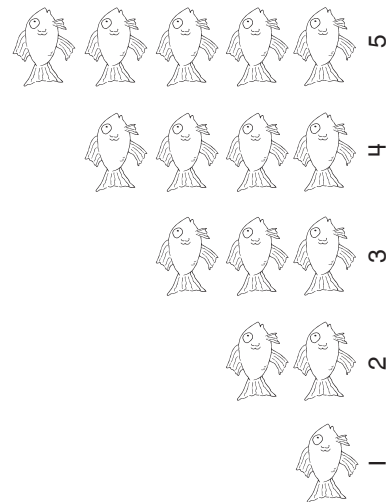
as many

Fold here



Point to each pair of ladybugs and flowers.
Say: There are **as many** ladybugs as there are flowers.

order



Point to each group of fish.
Say: The fish are in **order** from 1 to 5.



Name _____

first

Fold here



Point to the shaded car.
Say: This is the **first** car.

second



Point to the shaded car.
Say: This is the **second** car.



Name _____

third

Fold here



Point to the shaded car.
Say: This is the **third** car.



fourth



Point to the shaded car.
Say: This is the **fourth** car.

fifth

Fold here



Point to the shaded car.
Say: This is the **fifth** car.

fewest



Point to the group of frogs.
Say: The group of frogs has the **fewest**.



Name _____

most

Fold here



Point to the group of dragonflies.
Say: The group of dragonflies has the **most**.

